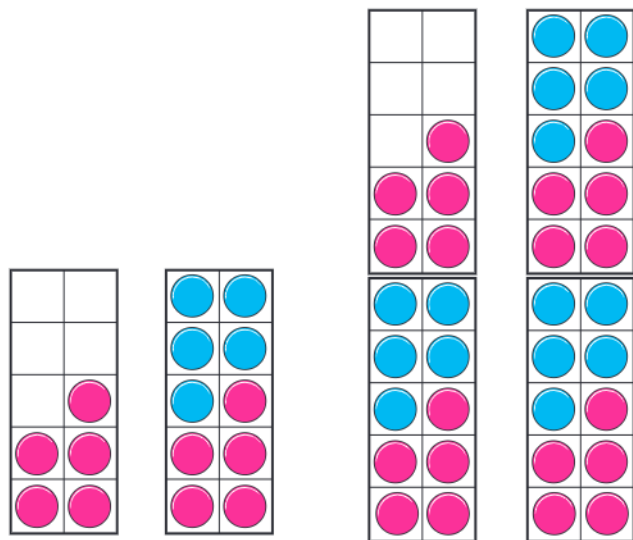


1 What are the numbers?




2 How many spots are there in total?



There are spots in total.

3 Colour 35 petals.



4 Fill in the missing numbers.

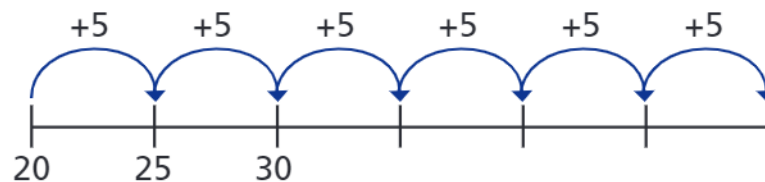
a)



b)



c)



5 Mo counts up to 50 in 5s.

Eva counts up to 50 in 2s.

What numbers do they both say?

Can you spot a pattern?



