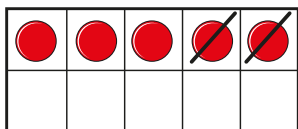
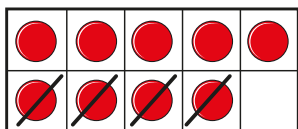


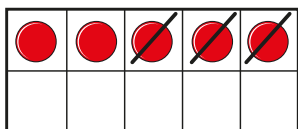
1 Match the counters to the number sentences.



$$9 - 4 = 5$$



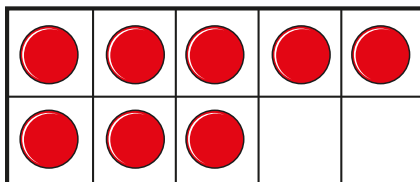
$$5 - 3 = 2$$



$$5 - 2 = 3$$

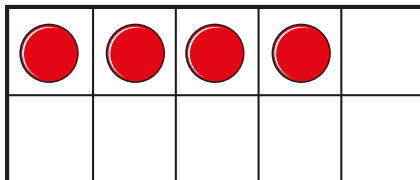
2 Cross out the counters to show the subtraction.

a)




$$8 - 2 = 6$$

b)



$$4 - 4 = 0$$

3 There are 10 cars in a car park.



4 cars leave.

How many cars are left in the car park?

4 Ann and Tom have 9 strawberries in total.



Ann eats 2 strawberries and Tom eats 1 strawberry.

How many strawberries do they have left?

5 Complete the subtractions.

a) $4 - 3 = \square$

c) $5 - 3 = \square$

b) $\square = 7 - 4$

d) $\square = 6 - 1$