

Time to the Half Hour

5a. What time does the clock show?



Half past three

Half past 4

Half past six



VF

5b. What time does the clock show?



Half past 2

Half past three

Half past 1



VF

6a. True or false? The clock shows half past ten.



VF

6b. True or false? The clock shows half past 7.



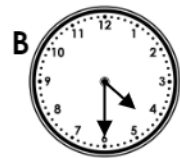
VF

7a. Draw a line to match the clocks to the correct written time.



Half past 4

Half past 5

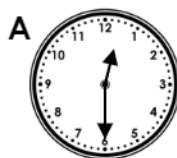


Half past 8



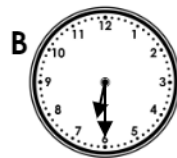
VF

7b. Draw a line to match the clocks to the correct written time.



Half past six

Half past one




Half past twelve




VF

8a. Draw the hour hand and minute hand on the clock face to show the time half past 2.



VF

8b. Draw the hour hand and minute hand on the clock face to show the time half past 12.



VF